



Balancing Equations WS #1

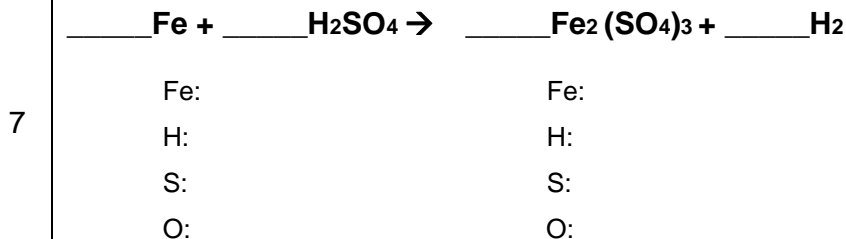
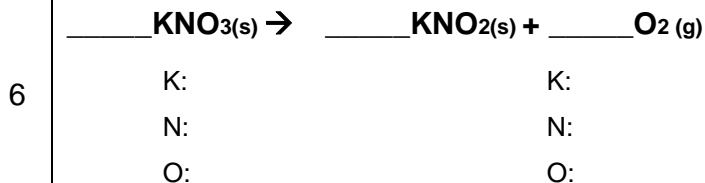
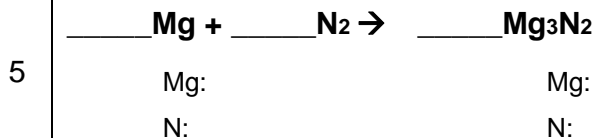
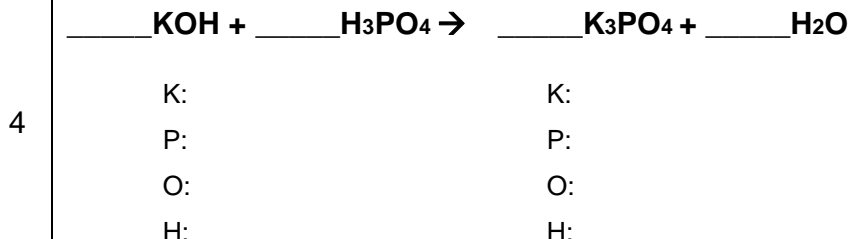
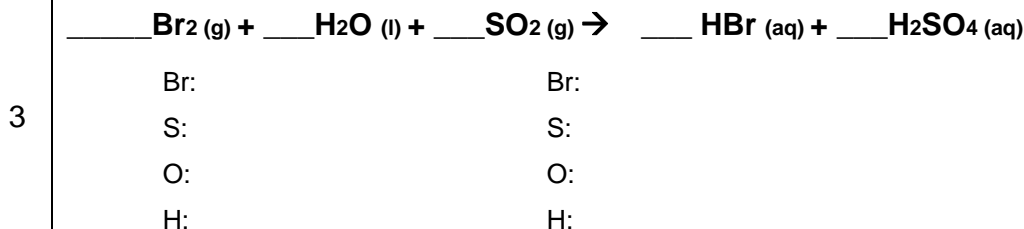
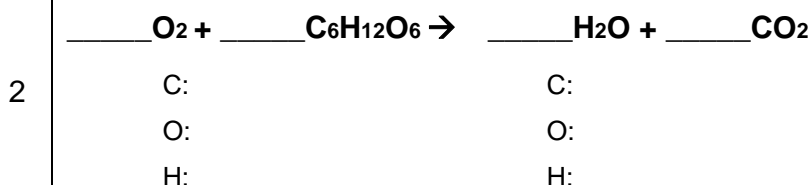
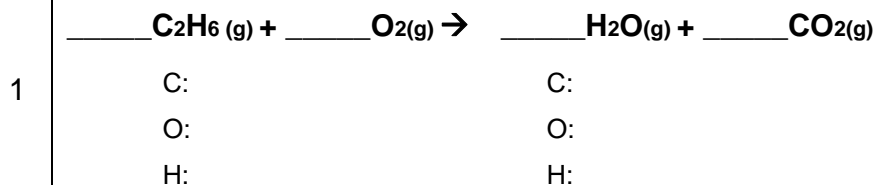
/14

Name _____

Period _____

Seat # _____

Q# Balance the following equations and show that you checked your work the way we did in class



8



Mg

Mg:

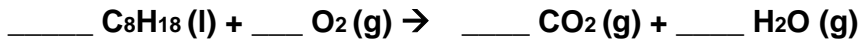
C:

C:

O:

O:

9



C:

C:

O:

O:

H:

H:

10



K:

K:

P:

P:

C:

C:

O:

O:

H:

H:

11



Pb:

Pb:

N:

N:

C:

C:

O:

O:

H:

H:

12



Ca:

Ca:

C:

C:

O:

O:

H:

H:

13



Na:

Na:

Cl:

Cl:

C:

C:

O:

O:

H:

H: