

Name: _____

Date: _____

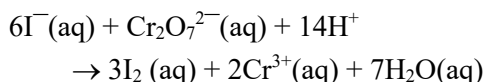
Period: _____

Seat #: _____

Directions: Any worksheet that is labeled with an * means it is suggested extra practice. We do not always have time to assign every possible worksheet that would be good practice for you to do. You can do this worksheet when you have extra time, when you finish something early, or to help you study for a quiz or a test. If and when you choose to do this Extra Practice worksheet, please do the work on binder paper. You will include this paper stapled into your Rainbow Packet when you turn it in, even if you didn't do any of this. We want to make sure we keep it where it belongs so you can do it later if you want to (or need to). If you did the work on binder paper you can include that in your Rainbow Packet after this worksheet. If we end up with extra class time then portions of this may turn into required work. If that happens you will be told which problems are turned into required. Remember there is tons of other extra practice on the class website...and the entire internet! See me if you need help finding practice on a topic you are struggling with.

1998

40. For this reaction, $E^\circ_{\text{cell}} = 0.79 \text{ V}$.



Given that the standard reduction potential for $\text{Cr}_2\text{O}_7^{2-}(\text{aq}) \rightarrow 2\text{Cr}^{3+}(\text{aq})$ is 1.33 V , what is E°_{red} for $\text{I}_2(\text{aq})$?

- a) $+0.54 \text{ V}$ b) -0.54 V
c) $+0.18 \text{ V}$ d) -0.18 V

41. What is the product formed at the anode in the electrolysis of $1.0 \text{ M NaNO}_3(\text{aq})$?

- a) $\text{H}_2(\text{g})$ b) $\text{NO}_2(\text{g})$
c) $\text{O}_2(\text{g})$ d) $\text{Na}(\text{s})$

42. Which of these ions is the best reducing agent?

Standard Reduction Potentials, E°	
$\text{Fe}^{3+}(\text{aq}) + \text{e}^- \rightarrow \text{Fe}^{2+}(\text{aq})$	$+0.77 \text{ V}$
$\text{Cu}^{2+}(\text{aq}) + \text{e}^- \rightarrow \text{Cu}^+(\text{aq})$	$+0.15 \text{ V}$

- a) Fe^{3+} b) Fe^{2+}
c) Cu^{2+} d) Cu^+

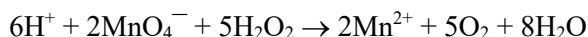
43. $\text{Zn}(\text{s}) + \text{Cl}_2(\text{g}, 1 \text{ atm}) \rightleftharpoons \text{Zn}^{2+}(\text{aq}, 1 \text{ M}) + 2\text{Cl}^-(\text{aq}, 1 \text{ M})$

An electrochemical cell based on this reaction has a cell voltage, E° , of 2.12 V . Which change could make the cell voltage greater than 2.12 V ?

- a) add more $\text{Zn}(\text{s})$
b) add more $\text{Cl}^-(\text{aq})$ ions
c) decrease the concentration of $\text{Zn}^{2+}(\text{aq})$ ions
d) decrease the partial pressure of Cl_2

1997

43. What is the function of H_2O_2 in this reaction?

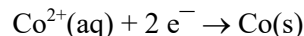


- a) catalyst b) reducing agent
c) oxidizing agent d) inhibitor

44. How much hydrogen is produced from the electrolysis of water in the same time that 2.2 L of oxygen is formed?

- a) 0.14 L b) 1.1 L
c) 2.2 L d) 4.4 L

45. Which of these changes will cause the value of the potential for this half-reaction to be less negative? ($E^\circ = -0.28 \text{ V}$ for the reaction.)



- a) increasing the amount of solid Co
b) decreasing the amount of solid Co
c) increasing the concentration of $\text{Co}^{2+}(\text{aq})$
d) decreasing the concentration of $\text{Co}^{2+}(\text{aq})$

1996

43. Use these reduction potentials to determine which one of the reactions below is spontaneous.

Reaction	Reduction Potentials, E°
$\text{Ag}^+ + \text{e}^- \rightarrow \text{Ag}$	0.800 V
$\text{Pb}^{2+} + 2\text{e}^- \rightarrow \text{Pb}$	-0.126 V
$\text{V}^{2+} + 2\text{e}^- \rightarrow \text{V}$	-1.18 V

- a) $\text{V}^{2+} + 2 \text{Ag} \rightarrow \text{V} + 2 \text{Ag}^+$
b) $\text{V}^{2+} + \text{Pb} \rightarrow \text{V} + \text{Pb}^{2+}$
c) $2 \text{Ag}^+ + \text{Pb}^{2+} \rightarrow 2 \text{Ag} + \text{Pb}$
d) $2 \text{Ag}^+ + \text{Pb} \rightarrow 2 \text{Ag} + \text{Pb}^{2+}$

44. It is possible to produce chlorine gas by electrolyzing any of these chlorine-containing compounds under the proper conditions. Which compound will require the smallest number of coulombs to produce one mole of chlorine?
- a) $\text{Ca}(\text{OCl})_2$ b) NaClO_2
 c) KClO_3 d) $\text{Mg}(\text{ClO}_4)_2$

1994

46. If solid nickel metal were added to separate aqueous solutions each containing 1M concentrations of Ag^+ , Cd^{2+} , and Sn^{2+} ions, how many metals would plate out, based on the given standard reaction potentials?

Standard Reduction Potentials

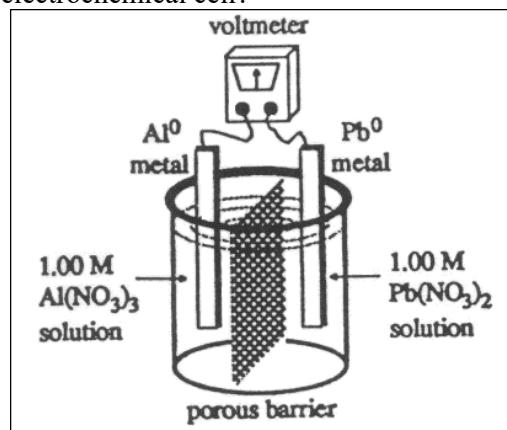
Ag^+/Ag	0.799 V
Sn^{2+}/Sn	-0.141 V
Ni^{2+}/Ni	-0.236 V
Cd^{2+}/Cd	-0.400 V

- a) zero b) one
 c) two d) three
48. Solutions of Ag^+ , Cu^{2+} , Fe^{3+} and Ti^{4+} are electrolyzed with a constant current until 0.10 mol of metal is deposited. Which will require the greatest length of time?
- a) Ag^+ b) Cu^{2+}
 c) Fe^{3+} d) Ti^{4+}

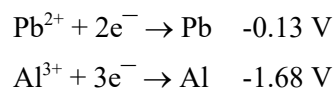
1993

67. How many grams of cobalt metal will be deposited when a solution of cobalt(II) chloride is electrolyzed with a current of 10. amperes for 109 minutes?
- a) 0.66 b) 4.0
 c) 20 d) 40

66. What voltage will be produced by the electrochemical cell?



Reduction Potentials

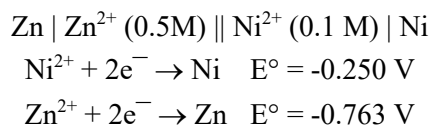


- a) 2.97V b) 1.55V
 c) -1.81V d) -2.97V

1992

59. A spoon is made the cathode in an electroplating apparatus containing a AgNO_3 solution. How many grams of Ag will be plated on the spoon if a current of 2.00 A is passed through the apparatus for 1.90 min.?
- a) 0.255 g b) 0.150 g
 c) 0.128 g d) 0.0638 g

60. A cell is set up using the following reactions:



What is the voltage of the cell?

- a) -0.513 V b) -1.013 V
 c) 0.492 V d) 0.513 V

Answers:

1998	40 a, 41 c, 42 d, 43 c
1997	43 b, 44 d, 45 c
1996	43 d, 44 a
1994	46 c, 48 d
1993	67 c, 66 b
1992	59 a, 60 c

Ch 21 – Electron Transfer Reactions

Selected NChO Problems

1998-40.	<p>(A) +0.54 V $E^\circ(\text{cell}) = E^\circ_{\text{red}}(\text{reduction}) - E^\circ_{\text{red}}(\text{oxidation})$ $0.79 = 1.33 - x$ $x = 1.33 - 0.79 = +0.54 \text{ volts}$</p>
1998-41.	<p>(C) O₂(g) anode = oxidation (lose electrons “LeO”) (+ electrode removes electrons from chemicals) NO₃⁻ and H₂O are at the + electrode NO₃⁻ is already oxidized. O in H₂O is oxidized. $2\text{H}_2\text{O} + 4\text{e}^- \rightarrow \text{O}_2 + 4\text{H}^+$</p>
1998-42.	<p>(D) Cu⁺ best reducing agent = most easily oxidized = smallest E° value look at product in equation with the smaller E° value $\text{Cu}^{2+} + \text{e}^- \rightarrow \text{Cu}^+$</p>
1998-43.	<p>(C) decrease the concentration of Zn²⁺(aq) ions anything that drives this reaction forward will increase the cell’s voltage... Le Châtelier’s add more Zn(s) [adding a solid will not shift the equilibrium] add more Cl⁻ ions [this will increase the reverse reaction] decrease Zn²⁺ ions [this is the answer] decrease pressure of Cl₂(g) [this will increase the reverse reaction]</p>
1997-43.	<p>(B) reducing agent if H₂O₂ is getting reduced it is an oxidizing agent if H₂O₂ is getting oxidized, it is a reducing agent H₂O₂ → O₂ is oxidation; O’s oxidation number changes from 1- to 0 a catalyst would have been written over the arrow. I don’t know how you would recognize an inhibitor. catalyst and inhibitor are “distractors” ...wrong answers</p>
1997-44.	<p>(D) 4.4 L Know that electrolysis of water is $2\text{H}_2\text{O}(\text{l}) \rightarrow 2\text{H}_2(\text{g}) + \text{O}_2(\text{g})$ if you make 2.2 L of O₂, you make twice as much H₂(g)</p>
1997-45.	<p>(C) increasing the concentration of Co²⁺(aq) be careful of convoluted wording... “less negative = more positive” anything that drives this reaction forward will increase the E° of the half-reaction. increasing or decreasing the solid Co will have no effect</p>
1996-43.	<p>(D) 2 Ag⁺ + Pb → 2 Ag + Pb²⁺ when the E° values are written in decreasing order (most + to most -) the upper-left & lower-right rule applies... Ag⁺ reacts with Pb⁰ and V⁰, etc. Pb²⁺ reacts with V⁰ but not Ag⁰</p>
1996-44.	<p>(a) Ca(OCl)₂ You need to look at the half-reaction forming Cl₂(g). The reaction with the least number of moles of e⁻s is the answer. Ca(OCl)₂ Cl has oxidation # of +1 in OCl⁻ $2 \text{OCl}^- + 2\text{e}^- \rightarrow \text{Cl}_2 + 2 \text{O}^{2-}$ NaClO₂ Cl has oxidation # of +3 in ClO₂⁻ $2 \text{ClO}_2^- + 6\text{e}^- \rightarrow \text{Cl}_2 + 4 \text{O}^{2-}$ KClO₃ Cl has oxidation # of +5 in ClO₃⁻ $2 \text{ClO}_3^- + 10\text{e}^- \rightarrow \text{Cl}_2 + 6 \text{O}^{2-}$ Mg(ClO₄)₂ Cl has oxidation # of +7 in ClO₄⁻ $2 \text{ClO}_4^- + 14\text{e}^- \rightarrow \text{Cl}_2 + 8 \text{O}^{2-}$</p>
1994-46.	<p>(C) two The chart is in order of decreasing reduction potentials (E° values) so the upper-left lower-right rule applies. Ag⁺ reacts with Ni⁰, Sn²⁺ reacts with Ni⁰</p>

1994-48.	<p>(D) Ti^{4+} You need to visualize the half-reactions for each metal. The reaction with the most electrons involved will require the greatest length of time. $Ag^+ + e^- \rightarrow Ag^0$ $Cu^{2+} + 2e^- \rightarrow Cu^0$ $Fe^{3+} + 3e^- \rightarrow Fe^0$ $Ti^{4+} + 4e^- \rightarrow Ti^0$</p>
1993-67.	<p>(C) 20 This is a line equation. Remember to begin with “amps x time” $10 \text{ amps} \times 109 \text{ min} \times \frac{60 \text{ sec}}{1 \text{ min}} \times \frac{1 \text{ Coulomb}}{1 \text{ amp} \cdot \text{sec}} \times \frac{1 \text{ mole } e^-}{96,500 \text{ C}} \times \frac{1 \text{ mole Co}}{2 \text{ mole } e^-} \times \frac{58.93 \text{ g Co}}{1 \text{ mole Co}} = 19.969 \text{ g Co}$</p>
1993-66.	<p>(B) 1.55 V $E^\circ(\text{cell}) = E^\circ_{\text{red}}(\text{reduction}) - E^\circ_{\text{red}}(\text{oxidation})$ $= -0.13 \text{ volts} - (-1.68 \text{ volts}) = +1.55 \text{ volts}$ Note: The overall reaction is $3Pb^{2+} + 2Al \rightarrow 3Pb + 2Al^{3+}$ (6 moles of electrons are involved) but the coefficients of 2 and 3 are not used for this calculation... not like Hess's Law.</p>
1992-59.	<p>(A) 0.255 g This is a line equation. Remember to begin with “amps x time” $2 \text{ amps} \times 1.9 \text{ min} \times \frac{60 \text{ sec}}{1 \text{ min}} \times \frac{1 \text{ Coulomb}}{1 \text{ amp} \cdot \text{sec}} \times \frac{1 \text{ mole } e^-}{96,500 \text{ C}} \times \frac{1 \text{ mole Ag}}{1 \text{ mole } e^-} \times \frac{107.9 \text{ g Ag}}{1 \text{ mole Ag}} = 0.2549 \text{ g Ag}$</p>
1992-60.	<p>(C) 0.492 V IF this were a STANDARD cell (everything 1 M) the equation would be: $E^\circ(\text{cell}) = E^\circ_{\text{red}}(\text{reduction}) - E^\circ_{\text{red}}(\text{oxidation})$ $-0.250 \text{ volts} - (-.763 \text{ volts}) = +0.513 \text{ volts}$ (answer D) However... The shortcut cell notation (anode cathode) shows that the $[Zn^{2+}]$ is only 0.5 M. The overall reaction is: $Zn^{2+} + Ni^0 \rightarrow Zn^0 + Ni^{2+}$ Since $[Zn^{2+}]$ is reduced, the cell will run at a little lower voltage... best answer is 0.492 volts. You can also calculate this answer using the Nernst equation.</p>